

# OP Geometry

8.1-8.2

Name \_\_\_\_\_

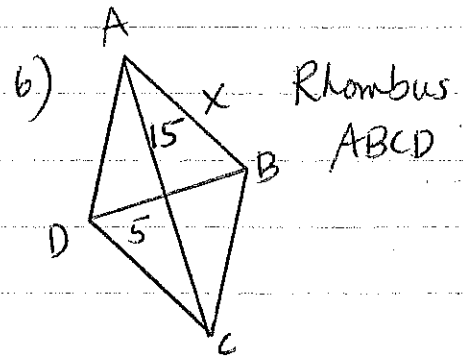
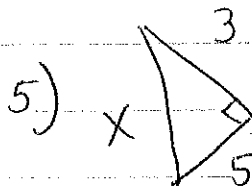
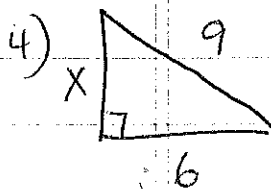
Find the geometric mean between

1)  $7$  &  $9$

2)  $14$  &  $14$

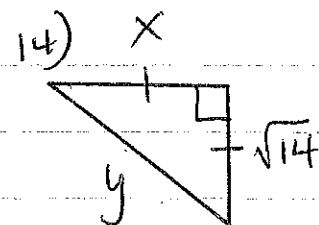
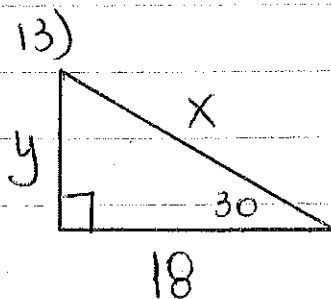
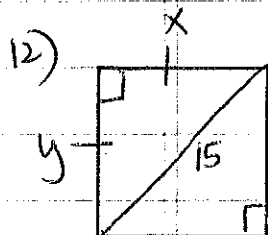
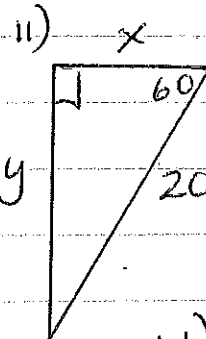
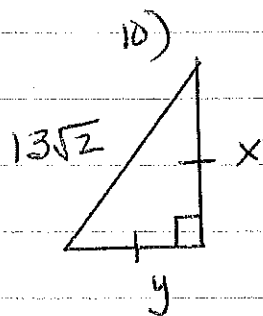
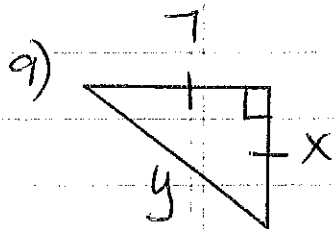
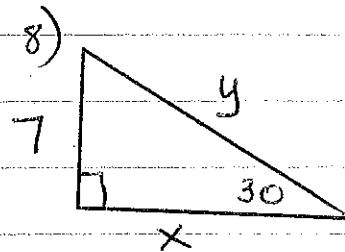
3)  $2\sqrt{3}$  &  $\sqrt{3}$

Find  $x$



7) Does  $23, 24$  &  $25$  form a Right  $\Delta$ ?  
Show proof.

Find  $x$  &  $y$



Quiz Thurs 8.1-8.2!